

2


Practice

Telling Time to the Half Hour









When the hour hand is in between two numbers, the hour will always be the lower number. The hour is 3.

When the minute hand points to the 6, it is 30 minutes past the hour.

The clock on the right shows the hour hand in between the 3 and 4 and the minute hand on the 6. The time is 3:30 or half past 3.
















Directions: Cut out the times at the bottom of the page. Glue each time under the correct clock.

1. 	2. 	3. 	4. 
5. 	6. 	7. 	8. 

4:30	9:30	2:30	1:30
6:30	5:30	10:30	12:30

Directions: Count the money in each box and write the total on the line below it. To discover the secret message, write the letter that goes with each amount of money on the lines at the bottom of the page.

A	D	E	F	I	M	N
						
_____ ¢	_____ ¢	_____ ¢	_____ ¢	_____ ¢	_____ ¢	_____ ¢

O	R	S	U	V	Y
					
_____ ¢	_____ ¢	_____ ¢	_____ ¢	_____ ¢	_____ ¢

8¢

15¢

25¢

35¢

3¢

50¢

60¢

45¢

55¢

50¢

20¢

35¢

3¢

30¢

50¢

45¢

15¢

45¢

15¢

40¢

20¢

3¢

13¢

15¢

3¢

!