


Table of Contents

Introduction	3	Tone	156
Grammar		Recognizing Voice	158
Parts of Speech	5	Idioms	162
Antonyms/Homophones/Synonyms	34	Analogies	164
Capitalization	45	Classifying	167
Contractions	49	Summarizing	169
Punctuation	53	Evaluating Information	173
Subjects and Predicates	65	Writing	
Complements	71	Sentences	176
Sentences	73	Paragraphs	183
Spelling and Phonics		Outlining	196
Consonants and Vowels	81	Descriptive Writing	197
Silent Letters	87	Creative Writing	201
Irregular Letter Sounds	89	Cursive Writing	207
End Sounds and Rhymes	92	Math	
Compounds	94	Addition	216
Syllabication	97	Subtraction	223
Root Words	101	Addition and Subtraction	228
Prefixes and Suffixes	103	Multiplication	230
General Spelling	111	Division	236
Abbreviations	120	All Functions	239
Pronunciation	122	Fractions	240
Reading		Measurement	244
Alphabetizing	125	Money	248
Multiple Meanings	127	Time	252
Following Directions	129	Logic	254
Sequence	132	Social Studies	
Main Idea	137	Maps, Charts, and Graphs	259
Comprehension and Recall	143	Geography	284
Making Inferences	147	Answer Key	291
Cause and Effect	152		
Recognizing Fact and Opinion	154		


Tune In to Homophones

Written on each television screen is a message. The messages are full of misused homophones. Rewrite the messages and correct the homophones.


1.




4.




2.



5.



3.



6.



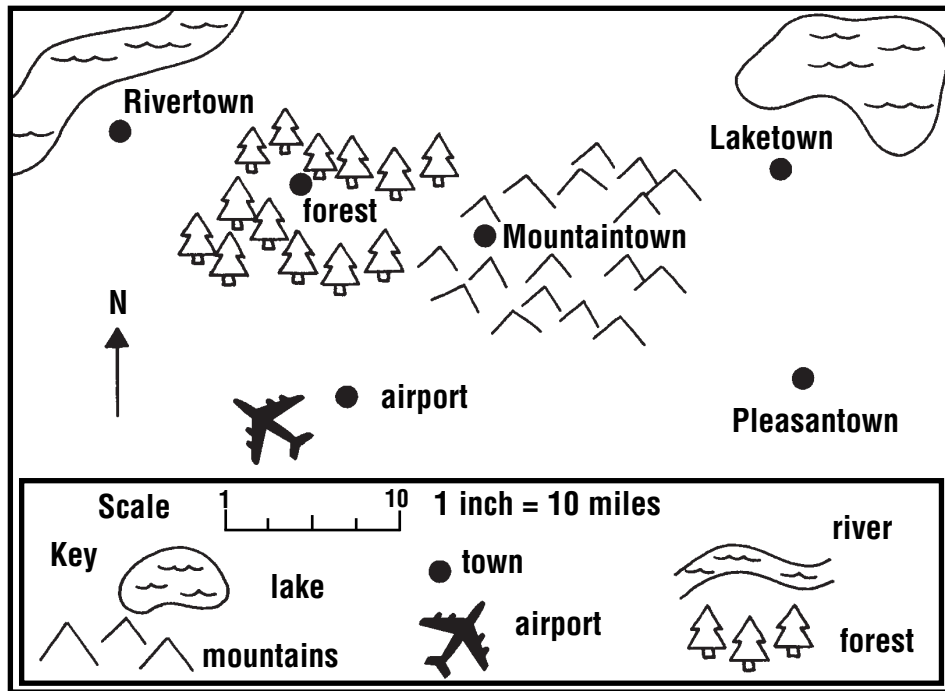
How to Measure

When you measure distances using a map scale, you can measure several different ways. The easiest and most accurate way is to use a standard measure or metric measure ruler.

You can also use a piece of string, paper, the joints of your fingers, a pencil or pen, or other things that could help you mark size.

Once you have chosen your measurement instrument, place it along the imaginary or real line between the distances you want to measure.

About how many miles is it between:



- Rivertown and the airport? _____
- Mountaintown and the forest? _____
- Rivertown and Laketown? _____
- Mountaintown and Pleasantown? _____
- Laketown and Mountaintown? _____
- Rivertown and the forest? _____

Is it farther from Pleasantown to Laketown or from Pleasantown to Mountaintown?
