

Table of Contents

Introduction	3
Skills Index	5
Testing Your Best	
Why Take Tests?	7
Lesson 1: Marking Your Answers.	8
Lesson 2: Minding the Minutes	9
Lesson 3: Guessing Correctly.	10
Language Arts	
Language Arts Strategies	13
Introduction	13
Here’s the Idea	13
Try and Discuss	14
Tips That Help	15
Practice Tests	16
Mathematics	
Mathematics Strategies	32
Introduction	32
Here’s the Idea	32
Try and Discuss	33
Tips That Help	33
Practice Tests	34
Science	
Science Strategies	50
Introduction	50
Here’s the Idea	50
Try and Discuss	51
Tips That Help	51
Practice Tests	52
Social Studies	
Social Studies Strategies	63
Introduction	63
Here’s the Idea	63
Try and Discuss	64
Tips That Help	64
Practice Tests	65
Student Answer Sheets	77
Answer Key	87

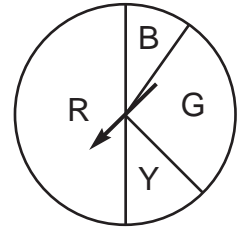
Mathematics: Probability

Directions: Read each problem. Look for the best answer. Fill in the answer circle for your choice.

Sample

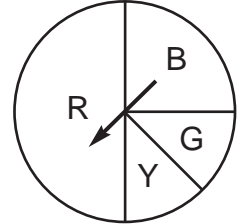
A. If you spin the spinner, what is the probability of the pointer landing on Y?

- (A) 1 (B) 0 (C) $\frac{1}{8}$ (D) $\frac{1}{2}$



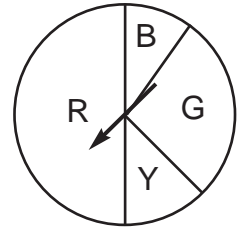
1. If you spin the spinner, what is the probability of the pointer landing on G?

- (A) $\frac{1}{2}$ (B) $\frac{1}{8}$ (C) 1 (D) $\frac{1}{4}$



2. If you spin the spinner, what is the probability of the pointer landing on R?

- (F) 1 (G) $\frac{1}{2}$ (H) $\frac{3}{8}$ (J) $\frac{1}{4}$



3. Two dice are rolled. Find the probability of rolling a total of 3.

- (A) $\frac{1}{9}$ (B) $\frac{1}{18}$ (C) $\frac{1}{36}$ (D) 1

4. A single die is tossed. Find the probability of obtaining a number other than 9.

- (F) $\frac{5}{6}$ (G) $\frac{1}{6}$ (H) 1 (J) $\frac{1}{2}$

5. A single die is tossed. Find the probability of obtaining a number greater than 4.

- (A) $\frac{5}{6}$ (B) $\frac{1}{3}$ (C) $\frac{1}{6}$ (D) 1

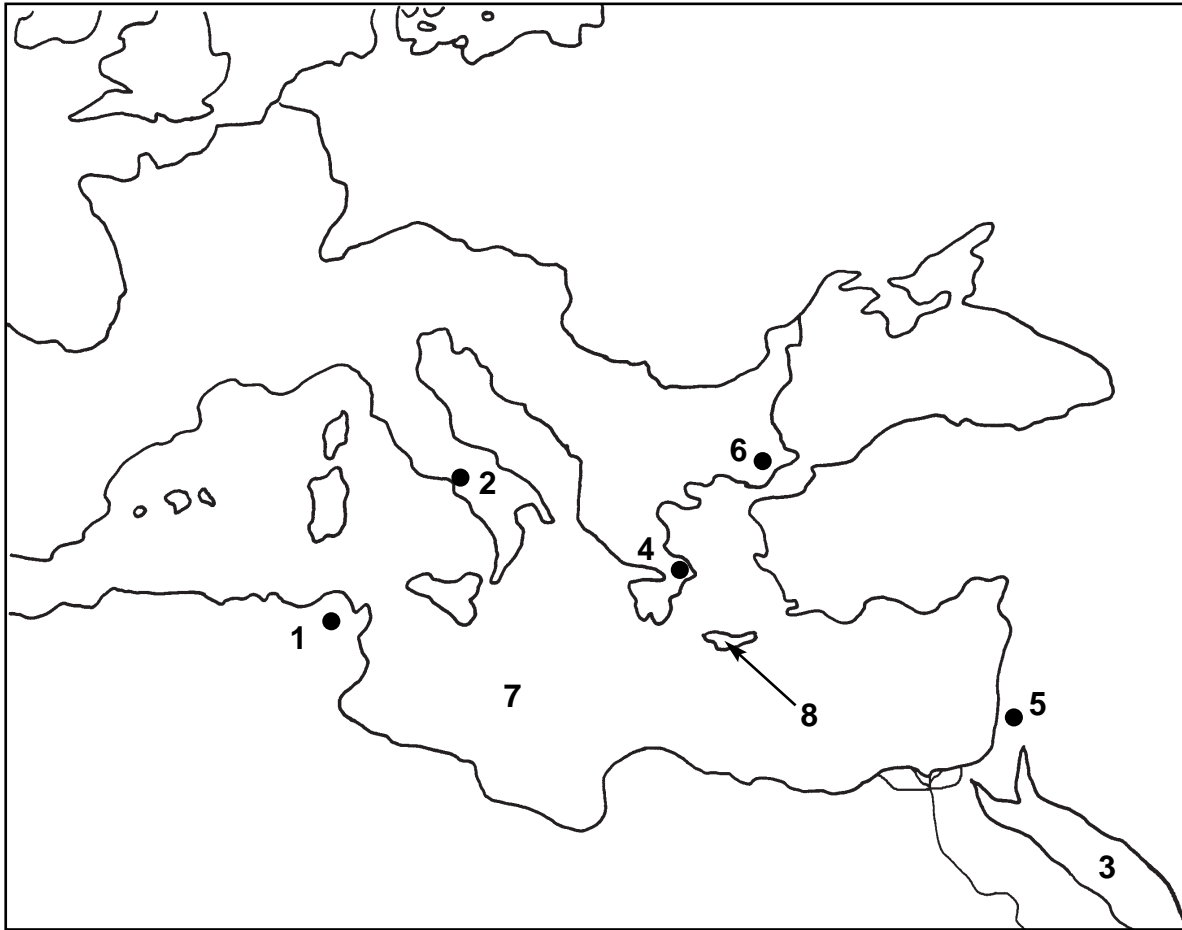
6. The probability of an event happening is 0.75. Which word would you use to describe the probability of the event happening?

- (F) not likely (G) likely (H) certain (J) impossible



Social Studies: Map of the Roman Empire

Directions: Identify the places on the map.



1. (A) Rome
(B) Carthage
(C) Jerusalem
(D) Sicily
-

2. (F) Athens
(G) Alexandria
(H) Rome
(J) Crete
-

3. (A) the Nile River
(B) the Red Sea
(C) the Mediterranean Sea
(D) the Black Sea
-

4. (F) Alexandria
(G) Athens
(H) Rome
(J) Constantinople
-

5. (A) Carthage
(B) Jerusalem
(C) Constantinople
(D) Crete
-

6. (F) Athens
(G) Rome
(H) Constantinople
(J) Alexandria
-

7. (A) the Nile River
(B) the Red Sea
(C) the Mediterranean Sea
(D) the Black Sea
-

8. (F) Athens
(G) Alexandria
(H) Rome
(J) Crete
-

